

© International Baccalaureate Organization 2025

All rights reserved. No part of this product may be reproduced in any form or by any electronic or mechanical means, including information storage and retrieval systems, without the prior written permission from the IB. Additionally, the license tied with this product prohibits use of any selected files or extracts from this product. Use by third parties, including but not limited to publishers, private teachers, tutoring or study services, preparatory schools, vendors operating curriculum mapping services or teacher resource digital platforms and app developers, whether fee-covered or not, is prohibited and is a criminal offense.

More information on how to request written permission in the form of a license can be obtained from <https://ibo.org/become-an-ib-school/ib-publishing/licensing/applying-for-a-license/>.

© Organisation du Baccalauréat International 2025

Tous droits réservés. Aucune partie de ce produit ne peut être reproduite sous quelque forme ni par quelque moyen que ce soit, électronique ou mécanique, y compris des systèmes de stockage et de récupération d'informations, sans l'autorisation écrite préalable de l'IB. De plus, la licence associée à ce produit interdit toute utilisation de tout fichier ou extrait sélectionné dans ce produit. L'utilisation par des tiers, y compris, sans toutefois s'y limiter, des éditeurs, des professeurs particuliers, des services de tutorat ou d'aide aux études, des établissements de préparation à l'enseignement supérieur, des fournisseurs de services de planification des programmes d'études, des gestionnaires de plateformes pédagogiques en ligne, et des développeurs d'applications, moyennant paiement ou non, est interdite et constitue une infraction pénale.

Pour plus d'informations sur la procédure à suivre pour obtenir une autorisation écrite sous la forme d'une licence, rendez-vous à l'adresse <https://ibo.org/become-an-ib-school/ib-publishing/licensing/applying-for-a-license/>.

© Organización del Bachillerato Internacional, 2025

Todos los derechos reservados. No se podrá reproducir ninguna parte de este producto de ninguna forma ni por ningún medio electrónico o mecánico, incluidos los sistemas de almacenamiento y recuperación de información, sin la previa autorización por escrito del IB. Además, la licencia vinculada a este producto prohíbe el uso de todo archivo o fragmento seleccionado de este producto. El uso por parte de terceros —lo que incluye, a título enunciativo, editoriales, profesores particulares, servicios de apoyo académico o ayuda para el estudio, colegios preparatorios, desarrolladores de aplicaciones y entidades que presten servicios de planificación curricular u ofrezcan recursos para docentes mediante plataformas digitales—, ya sea incluido en tasas o no, está prohibido y constituye un delito.

En este enlace encontrará más información sobre cómo solicitar una autorización por escrito en forma de licencia: <https://ibo.org/become-an-ib-school/ib-publishing/licensing/applying-for-a-license/>.

Chemistry

Standard level

Paper 1A

31 October 2025

Zone A afternoon | Zone B afternoon | Zone C afternoon

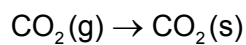
1 hour 30 minutes [Paper 1A and Paper 1B]

Instructions to candidates

- Do not open this examination paper until instructed to do so.
- Answer all questions.
- For each question, choose the answer you consider to be the best and indicate your choice on the answer sheet provided.
- A calculator is required for this paper.
- A clean copy of the **chemistry data booklet** is required for this paper.
- The maximum mark for paper 1A is **[30 marks]**.
- The maximum mark for paper 1A and paper 1B is **[55 marks]**.

Section A

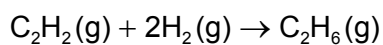
1. What is the name of this change of state?



- A. Condensation
 - B. Deposition
 - C. Sublimation
 - D. Freezing
2. What is the best evidence that energy levels are closer together as distance from the nucleus increases?
- A. Hydrogen has a line emission spectrum in each of the UV, visible and IR regions.
 - B. First ionization energies decrease down a group.
 - C. Lines in an emission spectrum converge at higher energy.
 - D. First ionization energy generally increases across a period.
3. How many ions are present in 0.20 mol of $(\text{NH}_4)_2\text{SO}_4$?
- A. $0.20 \times 1 \times 6 \times 10^{23}$
 - B. $0.20 \times 2 \times 6 \times 10^{23}$
 - C. $0.20 \times 3 \times 6 \times 10^{23}$
 - D. $0.20 \times 7 \times 6 \times 10^{23}$

4. What is the volume, in dm^3 , of ethane gas, $\text{C}_2\text{H}_6(\text{g})$, produced when 0.25dm^3 of ethyne, $\text{C}_2\text{H}_2(\text{g})$, reacts with 0.40dm^3 of hydrogen gas, $\text{H}_2(\text{g})$?

All volumes are measured under the same conditions.



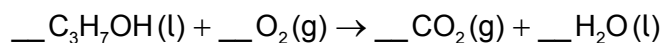
- A. 0.20
 B. 0.25
 C. 0.40
 D. 0.45
5. A fixed volume of an ideal gas, initially at 30°C and with a pressure of **P** Pa, was heated to 60°C . What is the resulting pressure in Pa?
- A. Half of **P**
 B. A little less than **P**
 C. A little more than **P**
 D. Two times **P**
6. What are the electron domain geometry and molecular geometry of sulfur dichloride, SCl_2 ?

	Electron domain geometry	Molecular geometry
A.	Tetrahedral	Linear
B.	Tetrahedral	Bent
C.	Linear	Linear
D.	Trigonal planar	Bent

7. Which molecule is most polar?
- A. CF_4
 B. CO_2
 C. NBr_3
 D. NH_3

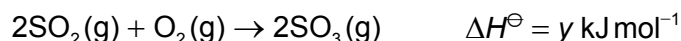
8. Which allotropes of carbon are electrical conductors?
- I. Graphite
 - II. Diamond
 - III. Graphene
- A. I and II only
 - B. I and III only
 - C. II and III only
 - D. I, II and III
9. Which metal has the strongest metallic bond?
- A. Mg
 - B. Al
 - C. K
 - D. Ga
10. Which type of material is a good conductor of heat and electricity in solid and liquid states, is insoluble in water, and typically has a high melting point?
- A. Covalent molecular
 - B. Covalent network
 - C. Ionic
 - D. Metallic
11. Which element is a p-block metal?
- A. Sn
 - B. Te
 - C. Cd
 - D. At

12. Which two elements form a compound with the strongest ionic attraction?
- A. Li and O
 - B. Li and Se
 - C. K and O
 - D. K and Se
13. Which oxide is the most basic?
- A. MgO
 - B. Al₂O₃
 - C. SiO₂
 - D. SO₃
14. Which compound has the highest boiling point?
- A. CH₃CH₂CH₂CH₃
 - B. CH₃CH₂CH₂CH₂CH₂CH₃
 - C. (CH₃)₃CCH₂CH₃
 - D. CH₃CH₂CH(CH₃)CH₂CH₃
15. What is the sum of the coefficients when 1 mol of propan-1-ol, C₃H₇OH, undergoes complete combustion?

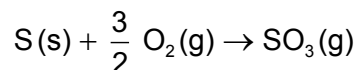


- A. 11.5
- B. 12
- C. 12.5
- D. 13

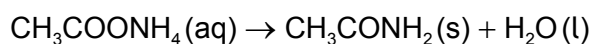
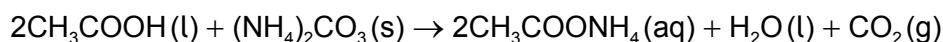
16. Consider these equations:



What is the value of ΔH^\ominus , in kJ mol^{-1} , for this reaction?



- A. $x + y$
- B. $x + \frac{1}{2} y$
- C. $x - \frac{1}{2} y$
- D. $x - y$
17. Which statement is a disadvantage of using biofuels instead of fossil fuels?
- A. Land is used that could be used to grow food.
- B. Combustion releases more energy per mol of fuel.
- C. Emissions of CO_2 to the atmosphere are lower overall.
- D. Crop waste can be used as a fuel.
18. What is the theoretical yield, in g, of ethanamide, CH_3CONH_2 , that can be produced from the reaction of 4.00 g of ammonium carbonate, $(\text{NH}_4)_2\text{CO}_3$, with excess ethanoic acid, CH_3COOH ?

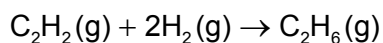


$$M_r(\text{NH}_4)_2\text{CO}_3 = 96.11$$

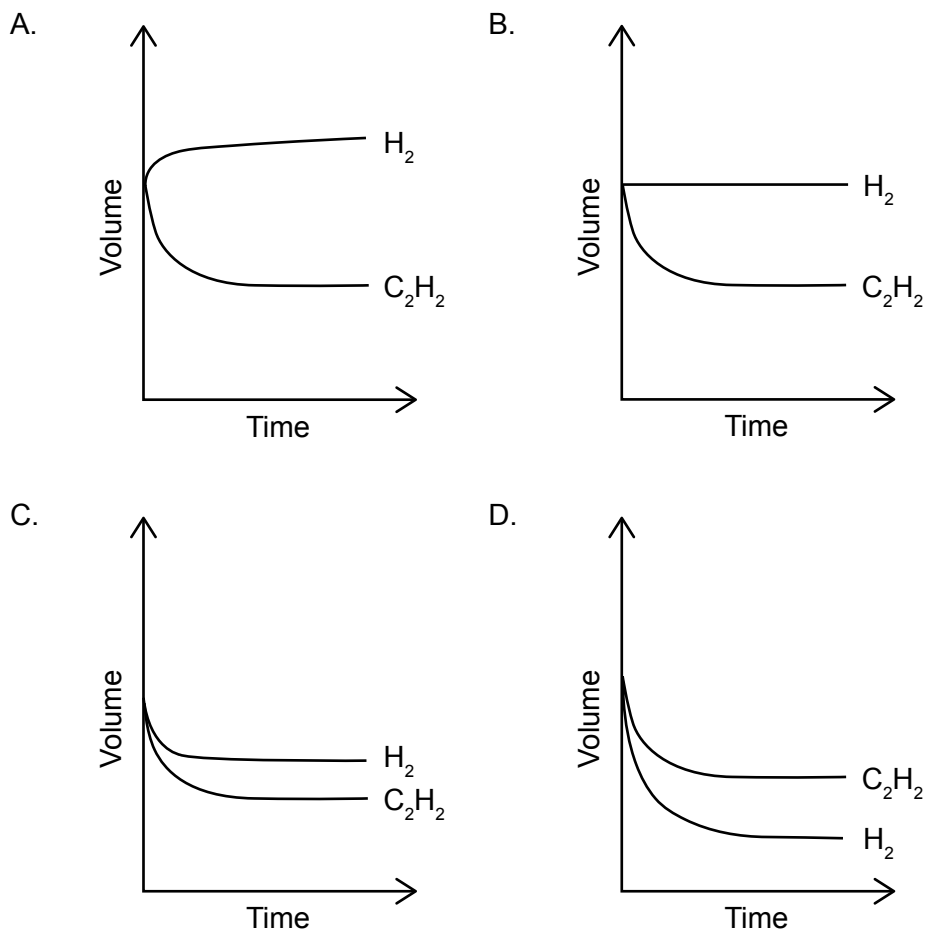
$$M_r\text{CH}_3\text{CONH}_2 = 59.08$$

- A. 1.23
- B. 2.46
- C. 4.92
- D. 6.51

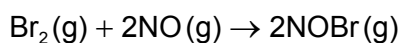
19. The volume of ethyne as it reacts with hydrogen is shown in the graphs.



Which graph shows how the volume of hydrogen changes with time?



20. Which conditions would increase the rate of reaction between bromine and nitrogen(II) oxide?

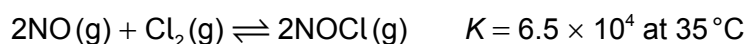


- I. Increasing temperature
 - II. Increasing pressure
 - III. Increasing volume
- A. I and II only
 - B. I and III only
 - C. II and III only
 - D. I, II and III

21. Which statement about catalysts is correct?
- A. Catalysts increase the kinetic energy of reacting particles.
 - B. Catalysts affect endothermic reactions more than exothermic reactions.
 - C. Catalysts increase reaction rate and are used up in a reaction.
 - D. Catalysts alter the mechanism of a reaction.
22. A crystal of copper(II) sulfate is in equilibrium with a copper(II) sulfate solution in a stoppered flask at constant temperature.

Which observation is possible?

- A. The colour of the solution becomes darker.
 - B. The volume of the liquid decreases.
 - C. The shape of the crystal changes slowly over time.
 - D. The size of the crystal decreases.
23. 2 mol of NO(g) and 1 mol of Cl₂(g) were mixed together, and the system was allowed to reach equilibrium at 35 °C:



Which relationship is correct for this equilibrium at 35 °C?

- A. [NOCl] = [NO]
- B. [NOCl] = 2[Cl₂]
- C. [NOCl] >> [NO]
- D. [NOCl] << [NO]

24. What is the concentration of OH^- (aq), in mol dm^{-3} , in a solution at 298.15 K with a pH of 4.50?

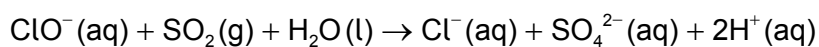
$$\text{pH} = -\log_{10}[\text{H}^+] \quad [\text{H}^+] = 10^{-\text{pH}} \quad K_w = [\text{H}^+][\text{OH}^-] \quad K_w = 1.00 \times 10^{-14} \text{ mol}^2 \text{ dm}^{-6}$$

- A. 3.16×10^{-10}
- B. 3.16×10^{-9}
- C. 3.16×10^{-5}
- D. 3.16×10^{-4}

25. Which aqueous solution has the lowest pH?

- A. $1.0 \text{ mol dm}^{-3} \text{ HNO}_3$
- B. $2.0 \text{ mol dm}^{-3} \text{ HCl}$
- C. $1.0 \text{ mol dm}^{-3} \text{ CH}_3\text{COOH}$
- D. $2.0 \text{ mol dm}^{-3} \text{ NaOH}$

26. What are the oxidizing and reducing agents in this reaction?



	Oxidizing agent	Reducing agent
A.	ClO^-	H_2O
B.	SO_2	SO_4^{2-}
C.	SO_2	ClO^-
D.	ClO^-	SO_2

27. Which statement about electrochemical cells is correct?

- A. Primary (voltaic) cells use electrical energy to produce a redox reaction.
- B. Electrolytic cells are rechargeable.
- C. Secondary cells can use electrical energy to produce a redox reaction.
- D. Primary (voltaic) cells are rechargeable.

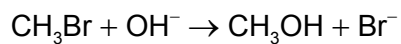
28. Which product may be obtained by the reduction of $\text{CH}_3\text{CH}_2\text{COOH}$?

- A. $\text{CH}_3\text{CH}(\text{OH})\text{CH}_3$
- B. $\text{CH}_3\text{CH}_2\text{CH}_2\text{OH}$
- C. $\text{CH}_3\text{CH}_2\text{OCH}_3$
- D. $\text{CH}_3\text{COOCH}_3$

29. Which species represents the product of the homolytic fission of Br_2 in the presence of UV light?

- A. Br^-
- B. $\text{Br} \overset{\curvearrowright}{\text{---}} \overset{\curvearrowleft}{\text{Br}}$
- C. $\text{Br} \overset{\curvearrowright}{\text{---}} \text{Br}$
- D. $\text{Br}\cdot$

30. Which species is the electrophile?



- A. OH^-
 - B. Br^-
 - C. CH_3OH
 - D. CH_3Br
-